



Name:	Klasse:	Datum:
-------	---------	--------

# 10er Einmaleins mit Eierkartons


1. Schreibe die fehlenden  
Rechnungen und  
die Lösungen!




$$1 \cdot 10 =$$




$$2 \cdot 10 =$$




$$3 \cdot 10 =$$




$$4 \cdot 10 =$$




$$\underline{\quad} \cdot 10 =$$




$$\underline{\quad} \cdot 10 =$$




$$\underline{\quad} \cdot 10 =$$



$$\underline{\quad} \cdot 10 =$$



$$\underline{\quad} \cdot 10 =$$



$$\underline{\quad} \cdot 10 =$$

