


Name: \_\_\_\_\_

Datum: \_\_\_\_\_

## Aus Plus wird Mal

1 Schreibe eine Plus und eine Malaufgabe!


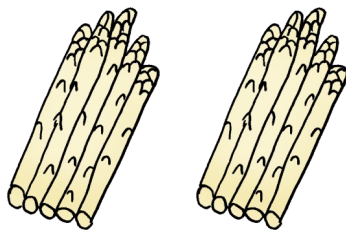


\_\_\_\_\_

\_\_\_\_\_

\_\_\_\_\_

\_\_\_\_\_




\_\_\_\_\_

\_\_\_\_\_

\_\_\_\_\_

\_\_\_\_\_




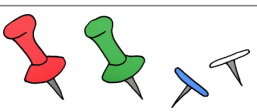


\_\_\_\_\_

\_\_\_\_\_

\_\_\_\_\_

\_\_\_\_\_



\_\_\_\_\_

\_\_\_\_\_

2) Schreibe zu jeder Plusrechnung eine Malrechnung in das Kästchen und rechne die Rechnungen aus!

$$3 + 3 + 3 + 3 = \underline{\quad\quad\quad} \quad \boxed{\quad\quad\quad\quad\quad\quad\quad\quad\quad\quad\quad}$$

$$2 + 2 + 2 + 2 + 2 + 2 = \underline{\quad\quad\quad} \quad \boxed{\quad\quad\quad\quad\quad\quad\quad\quad\quad\quad\quad}$$

$$9 + 9 = \underline{\quad\quad\quad} \quad \boxed{\quad\quad\quad\quad\quad\quad\quad\quad\quad\quad\quad}$$

$$4 + 4 + 4 + 4 = \underline{\quad\quad\quad} \quad \boxed{\quad\quad\quad\quad\quad\quad\quad\quad\quad\quad\quad}$$

$$7 + 7 + 7 = \underline{\quad\quad\quad} \quad \boxed{\quad\quad\quad\quad\quad\quad\quad\quad\quad\quad\quad}$$

$$10 + 10 + 10 + 10 + 10 + 10 + 10 = \underline{\quad\quad\quad} \quad \boxed{\quad\quad\quad\quad\quad\quad\quad\quad\quad\quad\quad}$$

$$1 + 1 + 1 + 1 + 1 + 1 = \underline{\quad\quad\quad} \quad \boxed{\quad\quad\quad\quad\quad\quad\quad\quad\quad\quad\quad}$$

$$6 + 6 + 6 = \underline{\quad\quad\quad} \quad \boxed{\quad\quad\quad\quad\quad\quad\quad\quad\quad\quad\quad}$$

3) Verbinde die Plusrechnung mit der richtigen Malrechnung!

$$\boxed{5 + 5 + 5 + 5 + 5 + 5}$$

$$\boxed{3 \cdot 7}$$

$$\boxed{8 + 8 + 8 + 8}$$

$$\boxed{6 \cdot 5}$$

$$\boxed{6 + 6 + 6 + 6 + 6}$$

$$\boxed{8 \cdot 4}$$

$$\boxed{4 + 4 + 4 + 4 + 4 + 4 + 4 + 4}$$

$$\boxed{5 \cdot 6}$$

$$\boxed{2 + 2 + 2 + 2 + 2}$$

$$\boxed{4 \cdot 8}$$

$$\boxed{7 + 7 + 7}$$

$$\boxed{5 \cdot 2}$$